

Time: 10 Minutes

Paper Math 2

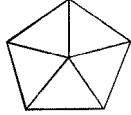
Total Marks: 10

3rd Month, 3rd Week, 5th Day Syllabus: Ex # 2. Q # 2.

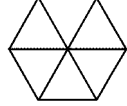
Q.1. Colour the shape for the given fraction. (10)

دی گئی فرکشن کے مطابق اشکال کو رنگ کریں۔

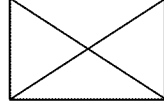
$\frac{3}{5}$



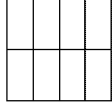
$\frac{5}{6}$



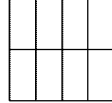
$\frac{3}{4}$



$\frac{7}{8}$



$\frac{2}{7}$



Time: 10 Minutes

Paper Math 2

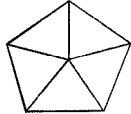
Total Marks: 10

3rd Month, 3rd Week, 5th Day Syllabus: Ex # 2. Q # 2.

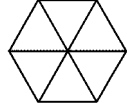
Q.1. Colour the shape for the given fraction. (10)

دی گئی فرکشن کے مطابق اشکال کو رنگ کریں۔

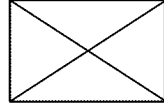
$\frac{3}{5}$



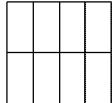
$\frac{5}{6}$



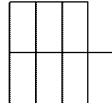
$\frac{3}{4}$



$\frac{7}{8}$



$\frac{2}{7}$



Time: 10 Minutes

Paper Math 2

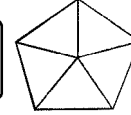
Total Marks: 10

3rd Month, 3rd Week, 5th Day Syllabus: Ex # 2. Q # 2.

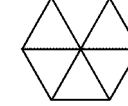
Q.1. Colour the shape for the given fraction. (10)

دی گئی فرکشن کے مطابق اشکال کو رنگ کریں۔

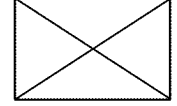
$\frac{3}{5}$



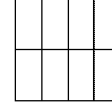
$\frac{5}{6}$



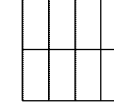
$\frac{3}{4}$



$\frac{7}{8}$



$\frac{2}{7}$



Time: 10 Minutes

Paper Math 2

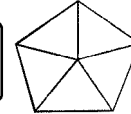
Total Marks: 10

3rd Month, 3rd Week, 5th Day Syllabus: Ex # 2. Q # 2.

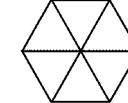
Q.1. Colour the shape for the given fraction. (10)

دی گئی فرکشن کے مطابق اشکال کو رنگ کریں۔

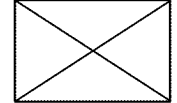
$\frac{3}{5}$



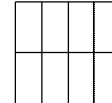
$\frac{5}{6}$



$\frac{3}{4}$



$\frac{7}{8}$



$\frac{2}{7}$

